



# NAND KISHORE VIDYA BHAVAN

(A Secondary School, Based on CBSE, Delhi)

DHANUHA, CHAKA, NAINI PRAYAGRAJ

URL: [www.nkvidyabhavan.org](http://www.nkvidyabhavan.org), E-mail: [info.nkvb@gmail.com](mailto:info.nkvb@gmail.com) Mobile: 9956377779

## HOLIDAY HOMEWORK (2023-24)

### CLASS-1

#### Hindi

1. प्रतिदिन एक पेज़ सुलेख लिखिए।
2. कोई भी चार कविता याद करें, फिर कॉपी में लिखें।
3. स्वर और व्यंजन की परिभाषा उदाहरण सहित याद करें, फिर कॉपी में लिखें।
4. निम्नलिखित बिना मात्रा वाले शब्दों को दस-दस लिखिए-
  - दो अक्षर वाले शब्द
  - तीन अक्षर वाले शब्द
  - चार अक्षर वाले शब्द
5. 'आ' की मात्रा लगाकर दस शब्द लिखिए।
6. 'इ' की मात्रा लगाकर दस शब्द लिखिए।
7. 'ई' की मात्रा लगाकर दस शब्द लिखिए।
8. 'लिखावट' में पृष्ठ संख्या 2-11 तक पूर्ण कीजिए।

**NOTE:** Holiday homework के लिए एक छोटी कॉपी बनाएं और यह कार्य उसमें ही करें।

#### ENGLISH LITERATURE

Q1. Write one page writing daily.

Q2. Complete the spellings.

a) S\_\_d      b) R\_\_n      c) H\_\_t      d) \_\_xe      e) P\_\_t

Q3. Who is Maya Mehta?

Q4. Who is Ravi Mehta?

Q5. Name any two Carnivals.

Q6. Who takes care of trees and plants in the park?



# NAND KISHORE VIDYA BHAVAN

(A Secondary School, Based on CBSE, Delhi)

DHANUHA, CHAKA, NAINI PRAYAGRAJ

URL: [www.nkvidyabhavan.org](http://www.nkvidyabhavan.org), E-mail: [info.nkvb@gmail.com](mailto:info.nkvb@gmail.com) Mobile: 9956377779

## ENGLISH LANGUAGE

Q1. Fill in the missing letters.

a) B \_ \_ \_ \_ G

b) L \_ \_ \_ \_ Q

c) H \_ \_ \_ \_ M

Q2. Write the letters which comes after.

a) C \_ \_

b) T \_ \_

c) X \_ \_

e) S \_ \_

Q3. Write the letters which comes before.

a) \_ \_ Z

b) \_ \_ P

c) \_ \_ E

d) \_ \_ L

e) \_ \_ Y

Q4. Fill in the blanks with 'a' or 'an'.

a) \_ duck

b) \_ elephant

c) \_ ant

d) \_ flower

e) \_ ox



# NAND KISHORE VIDYA BHAVAN

(A Secondary School, Based on CBSE, Delhi)

DHANUHA, CHAKA, NAINI PRAYAGRAJ

URL: [www.nkvidyabhavan.org](http://www.nkvidyabhavan.org), E-mail: [info.nkvb@gmail.com](mailto:info.nkvb@gmail.com) Mobile: 9956377779

## EVS

1- Complete the following information about yourself-

My name is \_\_\_\_\_.

I am \_\_\_\_\_ years old.

I study in \_\_\_\_\_ class.

I go to \_\_\_\_\_ school.

I like to eat \_\_\_\_\_.

I like to play \_\_\_\_\_.

I love my \_\_\_\_\_.

2- Draw 5 sense organs.

## SCIENCE

Q1. Write 10 things that you see in your surroundings.

Q2. Complete the spellings.

a) B\_\_ \_ K

b) B\_\_ \_ G

c) Ch\_\_ \_ \_ R

d) D\_\_ \_ S K

e) P E N\_\_ \_ \_ L

f) C\_\_ \_ R\_\_ \_ O\_\_ \_

g) A P\_\_ \_ L\_\_ \_

h) B\_\_ \_ N\_\_ \_ \_ N\_\_ \_

i) P\_\_ \_ MP\_\_ \_ IN

j) SP\_\_ \_ N\_\_ \_ \_ H

Q3. What are Surroundings ?

Q4. Why do living things need food ?

Q5. Give any two examples of natural non- living things .

Q6. Write two things that a living things can do?



# NAND KISHORE VIDYA BHAVAN

(A Secondary School, Based on CBSE, Delhi)

DHANUHA, CHAKA, NAINI PRAYAGRAJ

URL: [www.nkvidyabhavan.org](http://www.nkvidyabhavan.org), E-mail: [info.nkvb@gmail.com](mailto:info.nkvb@gmail.com) Mobile: 9956377779

Q7. Name two things you see.

- a) On the road \_\_\_\_\_
- b) in the market \_\_\_\_\_
- c) in your bedroom \_\_\_\_\_
- d) in the park. \_\_\_\_\_
- e) in the classroom \_\_\_\_\_

Q8. Name three living things and three non- living things.

- a) \_\_\_\_\_
- b) \_\_\_\_\_
- c) \_\_\_\_\_

Q9. Write the name of three grains.

Q10. Draw and colour your favourite vegetables.

## MATHS



Name \_\_\_\_\_

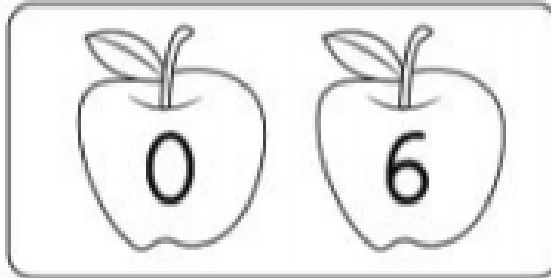



### 100 NUMBER CHART

1			4	5					
				15	16				20
21				25					30
31	32				36	37			
		43				47	48	49	50
51	52		54	55					
			64	65	66			69	70
71					76	77			
81	82	83						89	90
91	92	93	94	95				99	100



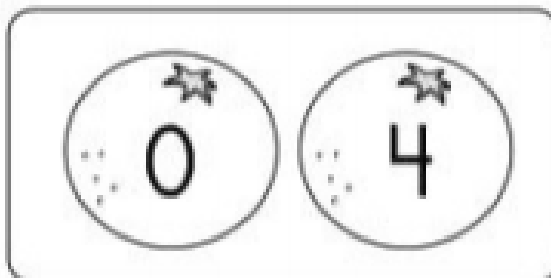



## Larger or Smaller?

In each box, color the apple with the larger number.



In each box, color the orange with the smaller number.





# NAND KISHORE VIDYA BHAVAN

(A Secondary School, Based on CBSE, Delhi)

DHANUHA, CHAKA, NAINI PRAYAGRAJ

URL: [www.nkvidyabhavan.org](http://www.nkvidyabhavan.org), E-mail: [info.nkvb@gmail.com](mailto:info.nkvb@gmail.com) Mobile: 9956377779

## Before, After and Between

Fill in the numbers Before, After and Between

\_\_\_, 9      2, \_\_\_, 4      5, \_\_\_

\_\_\_, 4      4, \_\_\_, 6      7, \_\_\_

\_\_\_, 5      6, \_\_\_, 8      6, \_\_\_

\_\_\_, 10      3, \_\_\_, 5      2, \_\_\_

\_\_\_, 6      9, \_\_\_, 11      8, \_\_\_

\_\_\_, 7      5, \_\_\_, 7      9, \_\_\_

\_\_\_, 3      7, \_\_\_, 9      3, \_\_\_

\_\_\_, 8      1, \_\_\_, 3      4, \_\_\_





# NAND KISHORE VIDYA BHAVAN

(A Secondary School, Based on CBSE, Delhi)

DHANUHA, CHAKA, NAINI PRAYAGRAJ

URL: [www.nkvidyabhavan.org](http://www.nkvidyabhavan.org), E-mail: [info.nkvb@gmail.com](mailto:info.nkvb@gmail.com) Mobile: 9956377779

Draw a line to match the numerals to the correct number word.

1

eight

2

three

3

six

4

one

5

seven

6

nine

7

five

8

two

9

ten




10

four



## Greater than, Less than or Equal to

Write in each circle with correct symbol, ">" "<" or "=".

<p>&gt; greater than</p>  <p><math>3 &gt; 2</math></p> <p>3 is greater than 2</p>	<p>= equal to</p>  <p><math>2 = 2</math></p> <p>2 is equal to 2</p>	<p>&lt; less than</p>  <p><math>2 &lt; 3</math></p> <p>2 is less than 3</p>
--	--	---

4 ○ 5	9 ○ 8	5 ○ 7
1 ○ 3	6 ○ 5	2 ○ 2
6 ○ 6	7 ○ 8	3 ○ 2
10 ○ 7	5 ○ 5	0 ○ 1



# NAND KISHORE VIDYA BHAVAN

(A Secondary School, Based on CBSE, Delhi)

DHANUHA, CHAKA, NAINI PRAYAGRAJ

URL: [www.nkvidyabhavan.org](http://www.nkvidyabhavan.org), E-mail: [info.nkvb@gmail.com](mailto:info.nkvb@gmail.com) Mobile: 9956377779

## Addition

$$\begin{array}{r} 1 \\ + 0 \\ \hline \end{array}$$

$$\begin{array}{r} 4 \\ + 2 \\ \hline \end{array}$$

$$\begin{array}{r} 6 \\ + 3 \\ \hline \end{array}$$

$$\begin{array}{r} 8 \\ + 2 \\ \hline \end{array}$$

$$\begin{array}{r} 5 \\ + 2 \\ \hline \end{array}$$

$$\begin{array}{r} 3 \\ + 1 \\ \hline \end{array}$$

$$\begin{array}{r} 7 \\ + 3 \\ \hline \end{array}$$

$$\begin{array}{r} 2 \\ + 1 \\ \hline \end{array}$$

$$\begin{array}{r} 4 \\ + 3 \\ \hline \end{array}$$

$$\begin{array}{r} 6 \\ + 4 \\ \hline \end{array}$$

$$\begin{array}{r} 9 \\ + 0 \\ \hline \end{array}$$

$$\begin{array}{r} 2 \\ + 2 \\ \hline \end{array}$$

$$\begin{array}{r} 6 \\ + 0 \\ \hline \end{array}$$

$$\begin{array}{r} 3 \\ + 3 \\ \hline \end{array}$$

$$\begin{array}{r} 8 \\ + 1 \\ \hline \end{array}$$

$$\begin{array}{r} 5 \\ + 5 \\ \hline \end{array}$$

$$\begin{array}{r} 7 \\ + 2 \\ \hline \end{array}$$

$$\begin{array}{r} 4 \\ + 4 \\ \hline \end{array}$$

$$\begin{array}{r} 9 \\ + 1 \\ \hline \end{array}$$

$$\begin{array}{r} 5 \\ + 4 \\ \hline \end{array}$$



# NAND KISHORE VIDYA BHAVAN

(A Secondary School, Based on CBSE, Delhi)

DHANUHA, CHAKA, NAINI PRAYAGRAJ


URL: [www.nkvidyabhavan.org](http://www.nkvidyabhavan.org), E-mail: [info.nkvb@gmail.com](mailto:info.nkvb@gmail.com) Mobile: 9956377779

## Addition on Number Line


$2 + 3 = \underline{\quad}$	<p>←   0   1   2   3   4   5   6   7   8   9   10   →</p>
$5 + 4 = \underline{\quad}$	<p>←   0   1   2   3   4   5   6   7   8   9   10   →</p>
$6 + 2 = \underline{\quad}$	<p>←   0   1   2   3   4   5   6   7   8   9   10   →</p>
$7 + 3 = \underline{\quad}$	<p>←   0   1   2   3   4   5   6   7   8   9   10   →</p>
$4 + 4 = \underline{\quad}$	<p>←   0   1   2   3   4   5   6   7   8   9   10   →</p>
$6 + 3 = \underline{\quad}$	<p>←   0   1   2   3   4   5   6   7   8   9   10   →</p>

## Subtraction

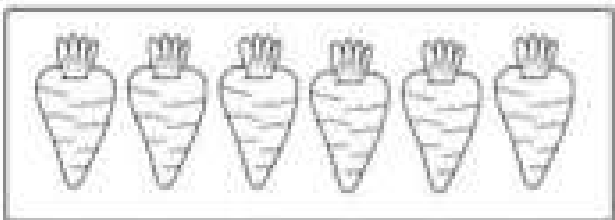
Write the answer inside the box.




$$5 - 2 =$$



$$7 - 4 =$$



$$6 - 1 =$$



$$9 - 3 =$$



$$3 - 3 =$$